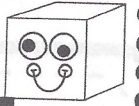


Name: _____



Valuable Words: long u, silent e

Find out how much each word is worth by adding up the value of each letter!

A:	B:	C:	D:	E:	F:	G:	H:	I:	J:	K:	L:	M:
4	1	1	2	5	1	2	3	6	1	2	5	4
N:	O:	P:	Q:	R:	S:	T:	U:	V:	W:	X:	Y:	Z:
4	7	2	1	3	5	5	3	1	2	10	8	9

WORD:	WRITE IT:	VALUE:
cube		
mule		
cute		
June		
flute		
ruler		
super		

rude		
tune		
rule		
mule		
duke		
tube		
chute		
student		

Name _____

{ Phonics }

Write **ee** or **ea** to complete each word.

long vowels RF.2.3



Name _____

{ Place Value }

Add.

number patterns 2.NBT.5

$4 + 3 = \underline{\quad}$

$14 + 3 = \underline{\quad}$


$24 + 3 = \underline{\quad}$

$32 + 10 = \underline{\quad}$

$32 + 20 = \underline{\quad}$

$32 + 30 = \underline{\quad}$

On a train there are 100 cars. Only 20 cars will fit on this page.



If I'm at car 5 and go up 10 cars, where am I? _____

If I'm at car 5 and go up 20 cars, where am I? _____

If I'm at car 5 and go up 60 cars, where am I? _____

Real or Make-believe?

Each box tells things you could really do and things that are make-believe. Circle the real answers.

Could you buy this?

- A puppy with brown spots.
- A live kitten that laughs and talks.
- A hen that lays eggs.

Could you do this?

- Open a door and say hello to a friend.
- Find a penny in the street.
- See a real rabbit reading a book.

Could you see this?

- A boat that will say bow-wow.
- A pony you could ride.
- An umbrella that will open.

Could you hear this?

- A door being shut.
- A horse talking on the telephone.
- A cow.



Name _____

{ Comprehension }

37

Read the story and then make some text-to-self connections.

connections RL.2.7

Today is the first snow of winter. My sister and I put on our coats and hats and ran outside to play. We tried to make a snowman, but there wasn't enough snow for it. We had a snowball fight instead. My sister had a great big snowball that she tried to put down the back of my coat. I ran away from her. I ran out onto the sidewalk, but it was icy and I slipped and fell. It hurt. A lot. For a few seconds I couldn't breathe. Then I started to cry. My sister laughed at me. "Cry baby! Cry baby! Cry baby!" she yelled. Then my feelings hurt, too. It wasn't very nice of her to call me a cry baby when I really did hurt myself. After that I didn't want to play with her, so I just went in the house and watched TV. The snow wasn't fun anymore.



How it is the same as my life:

How it is different than my life:

Name _____

{ Fast Facts }

37

Answer each problem as quickly as you can without using your fingers. If you don't know the answer right away, put a circle around the problem and go to the next one. After you've finished all the problems you know, go back and work out the problems you circled. Can you think of a way to remember these problems so you will know them next time?

$$\begin{array}{r} 5 \\ -0 \\ \hline \end{array}$$

$$\begin{array}{r} 7 \\ +1 \\ \hline \end{array}$$

$$\begin{array}{r} 6 \\ +3 \\ \hline \end{array}$$

$$\begin{array}{r} 5 \\ +4 \\ \hline \end{array}$$

$$\begin{array}{r} 2 \\ +5 \\ \hline \end{array}$$

$$\begin{array}{r} 5 \\ +0 \\ \hline \end{array}$$

$$\begin{array}{r} 4 \\ +3 \\ \hline \end{array}$$

$$\begin{array}{r} 2 \\ -0 \\ \hline \end{array}$$

$$\begin{array}{r} 7 \\ -1 \\ \hline \end{array}$$

$$\begin{array}{r} 6 \\ -3 \\ \hline \end{array}$$

$$\begin{array}{r} 1 \\ +0 \\ \hline \end{array}$$

$$\begin{array}{r} 6 \\ +4 \\ \hline \end{array}$$

$$\begin{array}{r} 5 \\ -2 \\ \hline \end{array}$$

$$\begin{array}{r} 10 \\ -8 \\ \hline \end{array}$$

$$\begin{array}{r} 3 \\ -2 \\ \hline \end{array}$$

$$\begin{array}{r} 10 \\ -7 \\ \hline \end{array}$$

$$\begin{array}{r} 8 \\ -2 \\ \hline \end{array}$$

$$\begin{array}{r} 8 \\ +0 \\ \hline \end{array}$$

$$\begin{array}{r} 7 \\ -3 \\ \hline \end{array}$$

$$\begin{array}{r} 8 \\ -5 \\ \hline \end{array}$$

$$\begin{array}{r} 1 \\ -0 \\ \hline \end{array}$$

$$\begin{array}{r} 1 \\ +9 \\ \hline \end{array}$$

$$\begin{array}{r} 4 \\ -1 \\ \hline \end{array}$$

$$\begin{array}{r} 9 \\ -4 \\ \hline \end{array}$$


Name: _____

Date: _____

Riddle 21

What do little dogs eat at the movies?

Count down by 2's. Write the missing numbers.
Solve the riddle using your answers.



40, 38, 36, _____ B	22, 20, 18, _____ O
46, 44, 42, _____ D	38, 36, 34, _____ A
30, 28, 26, _____ P	24, 22, 20, _____ T
50, 48, 46, _____ N	12, 10, 8, _____ E
28, 26, 24, _____ U	26, 24, 22, _____ C
34, 32, 30, _____ R	16, 14, 12, _____ S

Solve the Riddle!

Write the letter that goes with each number.

_____	_____	_____	_____	_____	_____	_____	_____
34	22	18	18	6	28	6	40
_____	_____	_____	_____	_____	_____	_____	_____
24	22	24	20	16	28	44	

Name _____ { Grammar }

38


Fill in the bubble next to the word(s) that best complete the sentence.

past tense L.2.1

1. The kids _____ jumping rope. likes liking liked

2. She _____ in the pool. swam swim swimmied

3. The dog _____ in the backyard. running ran runned



Use two of the small words to make a compound word that answers each riddle.

A red and black bug is a _____

The nail on your toe is your _____

"We'll see" means _____

bug nail
be lady
may toe

Name _____ { Problem Solving }

38

Solve the problems. Then **explain your thinking** using words, numbers, or pictures.

2.OA.1

Ten books can fit on a bookshelf. There are 8 shelves. How many books can fit?




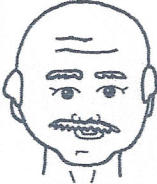
There are 18 apples and 2 baskets. There are the same number of apples in each basket. How many apples are in each basket?

How do you know if 16 is even or odd?

ACTIVITY 8

DIRECTIONS: Fill in the chart using Y for yes or N for no as you solve the puzzle.

P O M K

A boy, girl, their mom, and their grandfather have each picked one of the letters above. Find each person's chosen letter.

1. The grandfather's letter is made up of both straight lines and curves.
2. The mom's and girl's letters are made with only straight lines.
3. The mom's letter is the beginning sound in the word for "wet dirt."

Name _____

{ Writing }

L.2.1

39


expanding sentences

This is a boring sentence: **That monkey sat.**

Use words from the box to fill in the chart to make a SUPER SENTENCE!

	Describe It (adjective)	Who or What (noun)	Did What (verb)
That		monkey	

Adjectives
 funny hairy sleepy
 silly hungry brown



Verbs
 ate slept jumped
 laughed played swung

Now write your **super sentence** about the monkey.

- I used correct capitals. I used correct punctuation. I used my best spelling. My sentence makes sense.

Name _____

{ Graphing }

39

2.MD.10

The second grade soccer league has four teams. The tally chart shows how many games each team won during the season. Use the tally chart to make a bar graph. Circle the team that won the **MOST** games.

Games Won

Pirates	I
Lions	
Vipers	/
Comets	/ II



Games Won by Each Soccer Team

8				
7				
6				
5				
4				
3				
2				
1				
	Pirates	Lions	Vipers	Comets

1. Cut the shapes
precisely.

2. Make a square
with all 5 pieces.

3. Tape or glue onto
another piece of
paper.

