

Name: _____



Valuable Words: long i, silent e

Find out how much each word is worth by adding up the value of each letter!

A:	B:	C:	D:	E:	F:	G:	H:	I:	J:	K:	L:	M:
4	1	1	2	5	1	2	3	6	1	2	5	4
N:	O:	P:	Q:	R:	S:	T:	U:	V:	W:	X:	Y:	Z:
4	7	2	1	3	5	5	3	1	2	10	8	9

WORD:	WRITE IT:	VALUE:
fine		
wipe		
swipe		
ride		
ripe		
bike		
wide		

life		
while		
file		
time		
hide		
dime		
side		
mine		


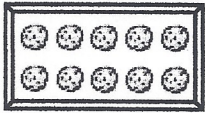
Name _____

{ Place Value }

31

Fill in the blanks.

+/- one and ten 2.NBT.8





1 more than 25 is _____.



10 more than 47 is _____.



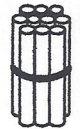
10 more than 13 is _____.



1 more than 39 is _____.



1 less than 28 is _____.



10 less than 56 is _____.



1 less than 41 is _____.



10 less than 41 is _____.

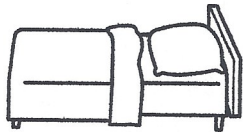
Name _____

{ Phonics }

31

Say the name of each picture. Is the vowel sound long or short?

vowel sounds RF.2.3



short
long



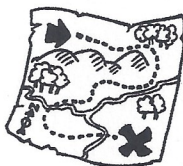
short
long




short
long



short
long



short
long



short
long



short
long



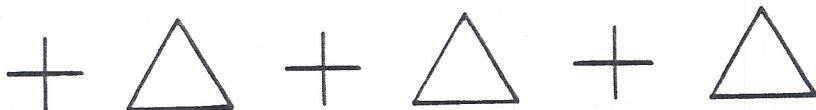
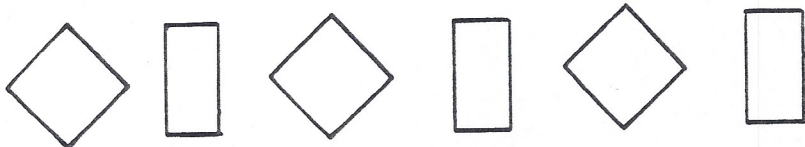
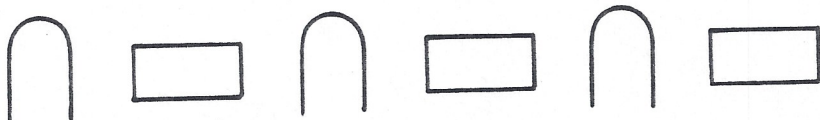
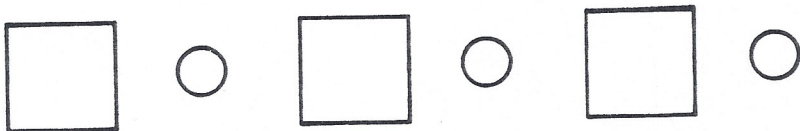

short
long



short
long

Name _____

Look at each pattern. Make the next shapes on the lines.



Name _____

{ Comprehension }

32

Read the story and then make some text-to-self connections.

connections RL.2.7

When Grandma came to visit, she brought me a jar of bubbles. I took them outside to blow them. I love watching bubbles float away. They look like they have a rainbow inside. If I could get inside a bubble could I touch the rainbow? Or would everything I see look like a rainbow? And could I float far away? I wouldn't mind floating away from my brother. Then he couldn't boss me. I could go someplace where I didn't have to share my toys or eat broccoli. It would be nice to fly away from the things I don't like, but I would miss all the things I love. My mom wouldn't be there. And neither would my stuffed bunny or my pet goldfish. I guess I'll stay here and do things I don't like sometimes. But I don't have to listen to what my brother says!



How the story is the same as my life:

How it is different than my life:

Name _____

{ Fast Facts }

32

Answer each problem as quickly as you can without using your fingers. If you don't know the answer right away, put a circle around the problem and go to the next one. After you've finished all the problems you know, go back and work out the problems you circled. Can you think of a way to remember these problems so you will know them next time?

8	6	7	9	7	8	7	5
<u>-5</u>	<u>+4</u>	<u>-7</u>	<u>-5</u>	<u>+2</u>	<u>-2</u>	<u>-2</u>	<u>+3</u>

7	6	3	4	9	6	8	6
<u>+1</u>	<u>-2</u>	<u>+2</u>	<u>+4</u>	<u>-1</u>	<u>-6</u>	<u>+2</u>	<u>-3</u>

8	8	4	8	0	4	10	2
<u>-1</u>	<u>+0</u>	<u>+2</u>	<u>-3</u>	<u>+1</u>	<u>+3</u>	<u>-3</u>	<u>+6</u>

Name: _____


Date: _____

Riddle 19

When is the best time
to eat lunch?

Add or subtract.

Solve the riddle using your answers.



$$90 - 50 = \underline{\quad} \quad \text{F}$$

$$50 + 50 = \underline{\quad} \quad \text{T}$$

$$40 + 40 = \underline{\quad} \quad \text{L}$$

$$100 - 20 = \underline{\quad} \quad \text{L}$$

$$70 - 50 = \underline{\quad} \quad \text{O}$$

$$80 + 10 = \underline{\quad} \quad \text{S}$$

$$80 - 80 = \underline{\quad} \quad \text{E}$$

$$60 + 0 = \underline{\quad} \quad \text{B}$$

$$60 - 10 = \underline{\quad} \quad \text{A}$$

$$90 - 80 = \underline{\quad} \quad \text{R}$$

$$100 - 30 = \underline{\quad} \quad \text{K}$$

$$10 + 20 = \underline{\quad} \quad \text{D}$$

Solve the Riddle!

Write the letter that goes with each number.

<u> </u>	<u> </u>	<u> </u>	<u> </u>	<u> </u>	<u> </u>	<u> </u>	<u> </u>	<u> </u>	<u> </u>
60	10	0	50	70	40	50	90	100	

Name _____

{ Grammar }

33

Read the sentence and the words below. Which word shows something *possessives L.2.2* belongs to someone?

1. The cat plays with a bell. The _____ bell is shiny.

- cats cat's cates

2. Ron has a new hat. _____ hat is blue.

- Ron's Ronss Rons

3. Pam read a book. _____ book was funny.

- Pams' Pams Pam's

4. The bird sings a song. The _____ song is pretty.

- birds birds' bird's

Match each picture with the correct spelling.




childs

children

clothes



clotheses



moths

mothes

Name _____

{ Problem Solving }

33

Solve the problems. Then **explain your thinking** using words, numbers, or pictures. 2.OA.1

There are 6 frogs and 2 puddles. There is the same number of frogs in each puddle. How many frogs are in each puddle?





Write a story problem that has an answer of **31 stickers**.

In my family there are 4 kids. In my cousin's family there are 5 kids. Can we all ride in a van that has 8 seats?

Write a number sentence that matches your story.

ACTIVITY 7

DIRECTIONS: Fill in the chart using Y for yes or N for no as you solve the puzzle.

A girl, a boy, and their mom and dad all have favorite shapes. Find each person's favorite shape.

1. The dad's and the mom's shapes have sides of different lengths.
2. The girl's shape has no straight lines.
3. The boy's shape has one less side than the mom's shape.

Name _____

{ Writing }

L.2.2

34

editing

Dear Robbie

I heard that you are selling a bike. I am looking for a blue bike. Is your bike blue! Please rite me back and let me know about the bike.

Sincerely,
Taylor



1. How should a letter begin?

- Dear Robbie Dear Robbie, Dear, Robbie

2. Choose the sentence that has the correct punctuation.

- Is your bike blue! Is your bike blue. Is your bike blue?

3. What is the correct way to spell *rite* as it is used in this letter?

- rite right write

4. How should a letter end?

- Sincerely, ,Sincerely Sincerely

Name _____

{ Graphing }

34

tally charts

The students in Mr. Martin's class voted on where they wanted to go on a field trip.

They used a tally chart to keep track of their votes. Use the tally chart to answer the questions. 2.MD.10

Field Trip Choices

zoo	farm	aquarium	museum
 		 	



1. Which choice got the most votes? _____

2. Which choice got 4 votes? _____

3. How many **more** votes did zoo get than museum? _____

4. How many students in all voted on the field trip? _____

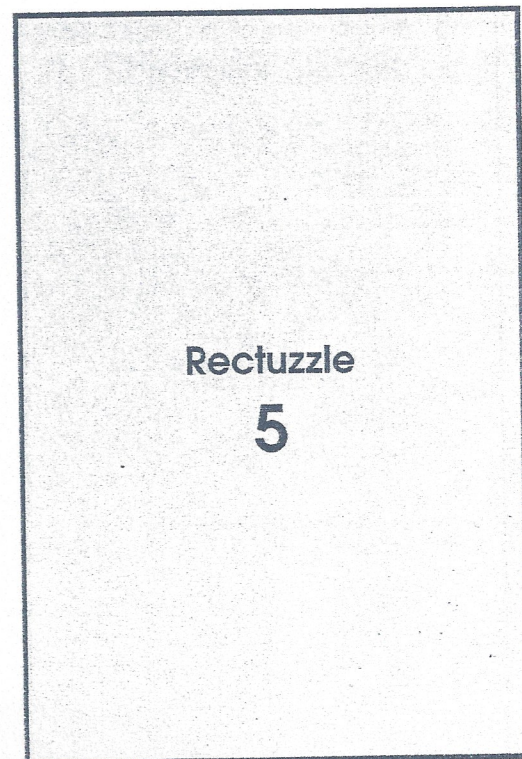
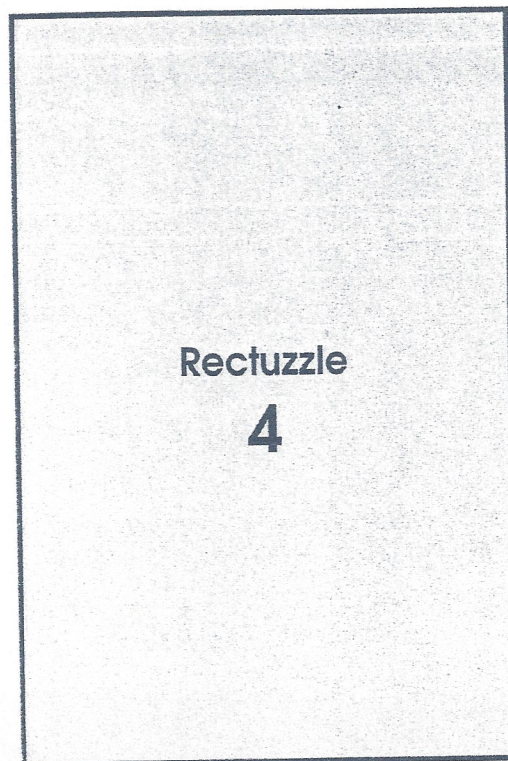
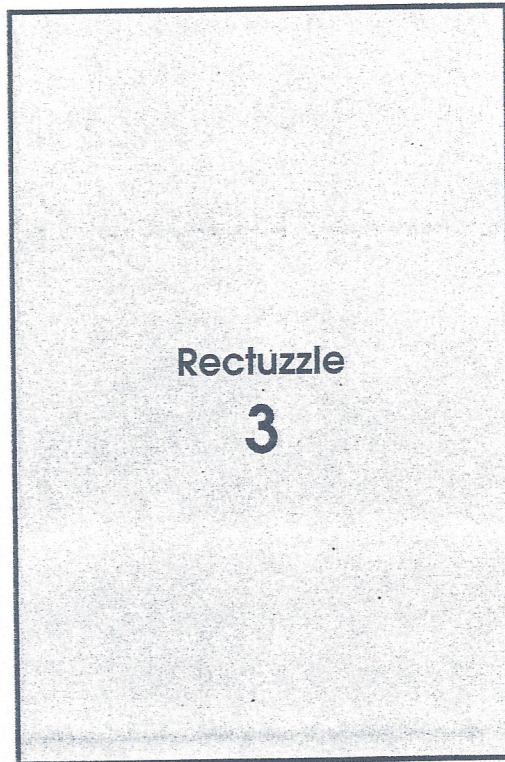
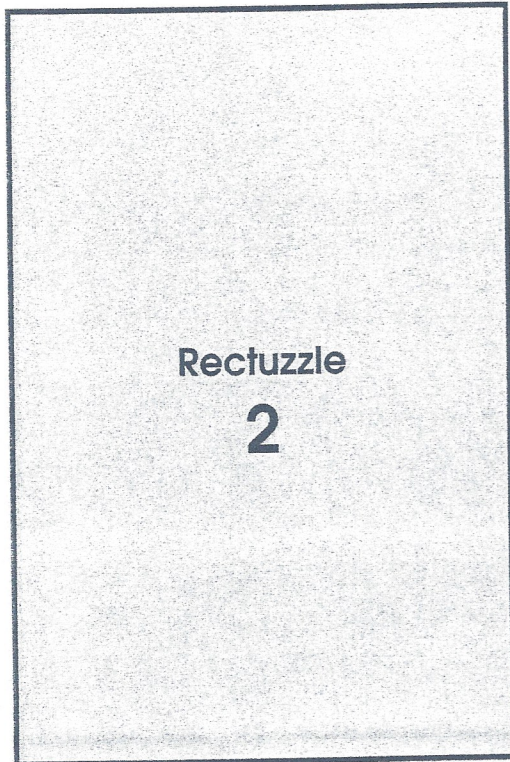
5. Two kids were absent when the class voted. When they got back to school, they both voted for aquarium. How many votes does aquarium have now? _____



More Rectuzzles

Name _____

- ◆ Cut out the "2" pieces on page 18. Put them on Rectuzzle 2 so they fit the outline. Do the same for Rectuzzles 3, 4 and 5.





Rectuzzle Pieces

Name _____

◆ Use with page 17.

