



Name: _____

Valuable Words: long a, silent e

Find out how much each word is worth by adding up the value of each letter!

A:	B:	C:	D:	E:	F:	G:	H:	I:	J:	K:	L:	M:
4	1	1	2	5	1	2	3	6	1	2	5	4
N:	O:	P:	Q:	R:	S:	T:	U:	V:	W:	X:	Y:	Z:
4	7	2	1	3	5	5	3	1	2	10	8	9

WORD:	WRITE IT:	VALUE:
cape		
drapes		
fame		
late		
bake		
wake		
cake		

date		
rake		
fake		
fade		
mane		
plate		
flake		
stake		

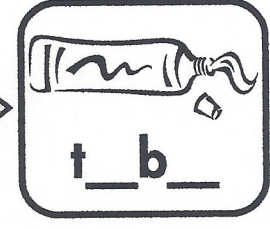



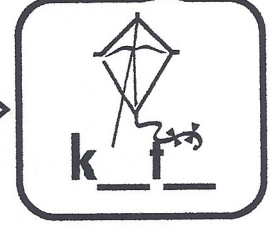
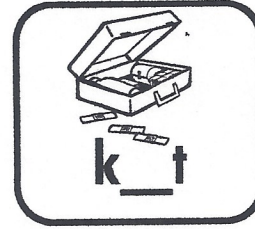
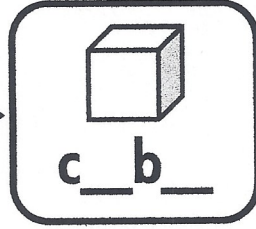



Name _____

{ Phonics }

26

Fill in the missing letters to complete each word.

vowel patterns RF.2.3



Name _____

{ Place Value }

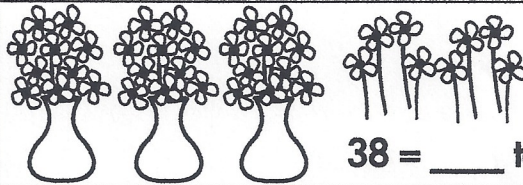
26

Write how many tens and ones.


tens and ones 2.NBT.1



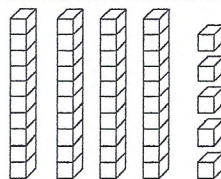
23 = ___ tens ___ ones



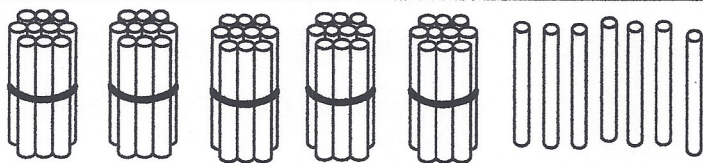
38 = ___ tens ___ ones



26 = ___ tens ___ ones



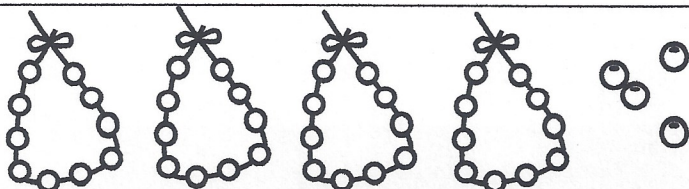
45 = ___ tens ___ ones



tens	ones



57



tens	ones



Color the single shapes that are exactly like a part of the figure in the first box.

	<p>1 </p> <p>2 </p> <p>3 </p> <p>4 </p>
--	-----------------------------------------

	<p>1 </p> <p>2 </p> <p>3 </p> <p>4 </p>
--	-----------------------------------------

	<p>1 </p> <p>2 </p> <p>3 </p> <p>4 </p>
--	-----------------------------------------

Read the story and answer the questions

Manuel looked down at all the seashells. His dad said he could choose one to take home with him. Manuel wanted to choose the best seashell to help him remember his vacation. He picked up a spotted one, but it was so tiny he was afraid he would lose it. The brown one he found was probably too big to fit in his suitcase. He put it back too. He found a clamshell, but the clam was still living in it! Finally he saw the perfect seashell. It was white and pointy. It fit just right in his hand. And best of-all, when he put it by his ear he could hear the ocean! Manuel found a wonderful souvenir to help him remember this trip.

1. A good title for this story would be:

Seashell Memories

Clamshells

Manuel's Dad

2. Where and when does this story most likely happen? _____

3. What makes Manuel's seashell perfect for him? _____

Answer each problem as quickly as you can without using your fingers. If you don't know the answer right away, put a circle around the problem and go to the next one. After you've finished all the problems you know, go back and work out the problems you circled. Can you think of a way to remember these problems so you will know them next time?

5	10	6	7	6	6	8	8
<u>-3</u>	<u>-0</u>	<u>-4</u>	<u>-0</u>	<u>-6</u>	<u>-3</u>	<u>-4</u>	<u>-3</u>

6	8	7	7	7	4	9	9
<u>-3</u>	<u>-2</u>	<u>-7</u>	<u>-5</u>	<u>-2</u>	<u>-1</u>	<u>-7</u>	<u>-1</u>


5	8	2	7	10	10	9	8
<u>-5</u>	<u>-1</u>	<u>-0</u>	<u>-6</u>	<u>-3</u>	<u>-7</u>	<u>-5</u>	<u>-2</u>

Riddle 16

Why didn't the sad
frog jump?

Add or subtract.

Solve the riddle using your answers.



$$21 - 5 = \underline{\quad} \\ \text{A}$$

$$20 - 9 = \underline{\quad} \\ \text{Y}$$

$$18 + 4 = \underline{\quad} \\ \text{H}$$

$$13 + 6 = \underline{\quad} \\ \text{S}$$

$$24 - 6 = \underline{\quad} \\ \text{E}$$

$$14 - 8 = \underline{\quad} \\ \text{W}$$

$$16 + 7 = \underline{\quad} \\ \text{N}$$

$$17 + 3 = \underline{\quad} \\ \text{U}$$

$$23 + 2 = \underline{\quad} \\ \text{O}$$

$$15 + 9 = \underline{\quad} \\ \text{P}$$

$$19 - 5 = \underline{\quad} \\ \text{T}$$

$$25 - 16 = \underline{\quad} \\ \text{R}$$

Solve the Riddle!

Write the letter that goes with each number.

22	18	6	16	19	14	25	25
20	23	22	25	24	24	11	

Write the correct verb from the box to finish the sentence.


verb tense L.2.1

talk
talked

1. When I was a baby, I _____ in silly words like "goo."
Now I _____ like a big kid.

cry
cried

2. When I was a baby, I _____ a lot.
Now I only _____ if I get hurt.

sleep
slept

3. When I was a baby, I _____ in a crib.
Now I _____ in my own bed.

try
tried

4. When I was a baby, I _____ lots of things
Even now I like to _____ new things.

Solve the problems. Then **explain your thinking** using words, numbers, or pictures.

2.OA.1

True or False?

The number 12 is odd.

Prove it.

Kai thinks that the number 15 is even. Is he right or wrong? Prove it.

Write a story problem that has an answer of **24 crayons**.

Write a number sentence that matches your story.

ACTIVITY 6

DIRECTIONS: Fill in the chart using Y for yes or N for no as you solve the puzzle.



Pam				
Dawn				
Rae				
Jan				

Pam, Dawn, Rae, and Jan are sisters. Find each girl's name.

1. Pam wears a cap and is taller than Rae and Jan.
2. Rae is shorter than Dawn, but taller than Jan.

Name _____

{ Writing }

29

capital letters

L.2.2

Write an answer for each question. Remember the capital letter!

1. What is your first name? _____
2. What is your last name? _____
3. What is your school? _____
4. What is your friend's name? _____
5. What is your favorite store? _____
6. What is your favorite holiday? _____
7. Who is your teacher? _____

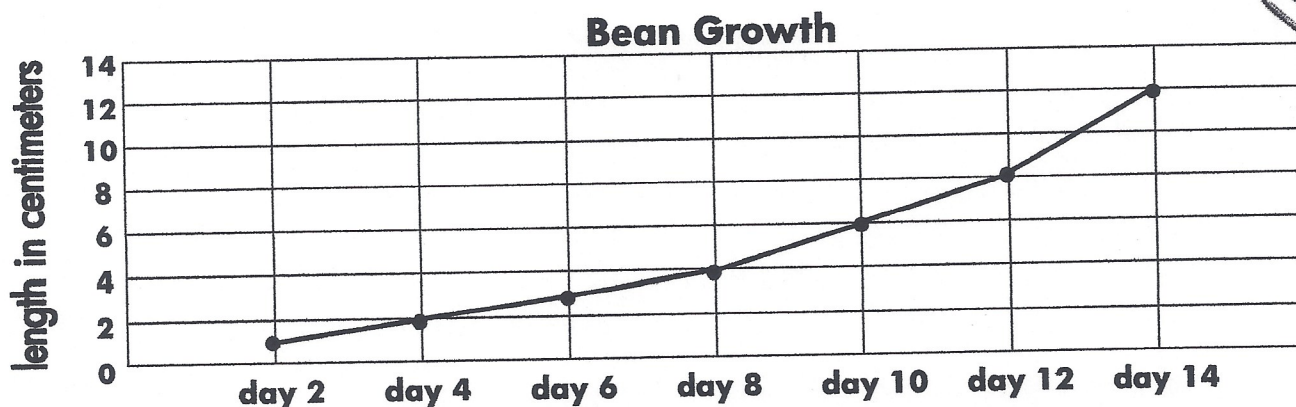
Name _____

{ Graphing }

29

line graph 2.MD.10

The 2nd graders are sprouting a bean. They measured its growth every other day for 14 days.



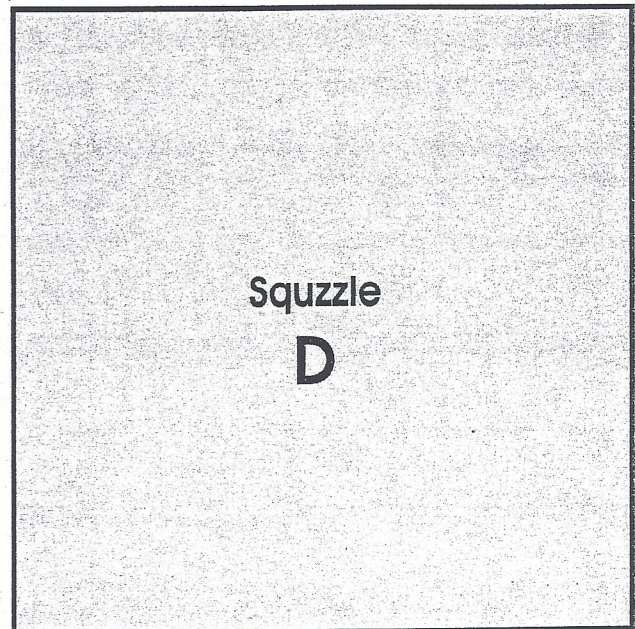

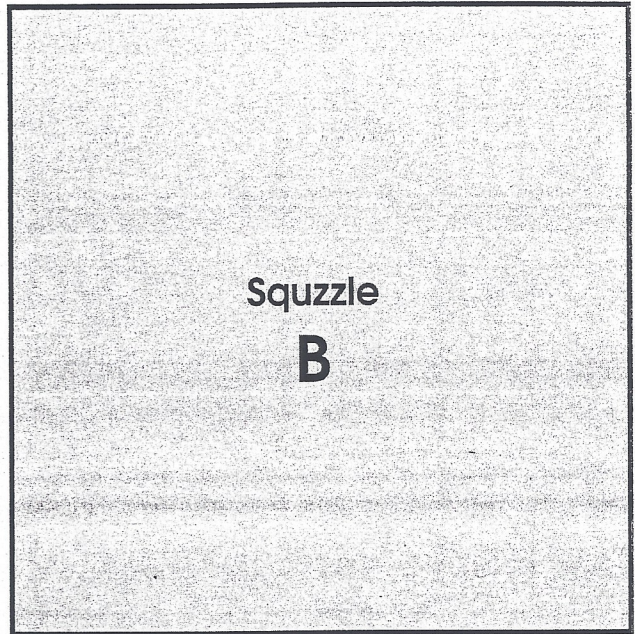
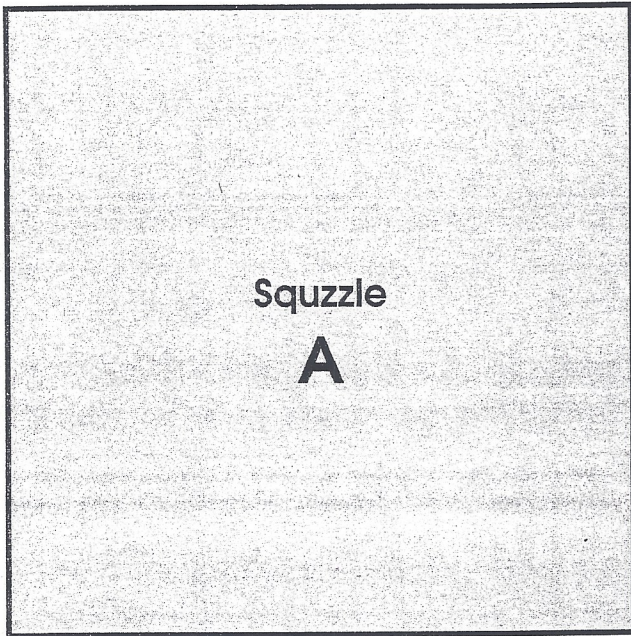
1. How long was the sprout on day 4? _____ centimeters
2. How many days did it take the sprout to reach 8 centimeters? _____
3. About how long was the sprout on day 6? _____ centimeters
4. How long might the sprout be on day 16? _____ centimeters



Squzzles

Name _____

- ◆ Cut out all the "A" pieces on the next page.
- ◆ Put them on Squzzle A so they fit the outline.
- ◆ Do the same for Squzzles B, C and D.





Squizzes

Name _____

◆ Use with page 14.

