

Name: _____



Valuable Words: eer/ear

Find out how much each word is worth by adding up the value of each letter!

A:	B:	C:	D:	E:	F:	G:	H:	I:	J:	K:	L:	M:
4	1	1	2	5	1	2	3	6	1	2	5	4
N:	O:	P:	Q:	R:	S:	T:	U:	V:	W:	X:	Y:	Z:
4	7	2	1	3	5	5	3	1	2	10	8	9

WORD:	WRITE IT:	VALUE:
bear		
gear		
ear		
hear		
fear		
tear		
search		

earn		
beard		
year		
steer		
career		
peer		
cheer		
deer		

Name _____

{ Phonics }

vowel sounds RF.2.3

Choose the word with the same vowel sound.

- Which word has the same vowel sound as **snow**?
 boat cow gone
- Which word has the same vowel sound as **light**?
 friend try give
- Which word has the same vowel sound as **paint**?
 said they have
- Which word has the same vowel sound as **school**?
 shook build grew
- Which word has the same vowel sound as **weed**?
 head great dream

Add **kn** or **wr** to make a new word. Draw a line from the word to the picture.

___ **ot**


___ **ist**

___ **ap**

___ **ife**

___ **eath**

___ **it**



Name _____

{ Place Value }

+/- 100 2.NBT.7

hundreds	tens	ones
(100)	(10) (10) (10) (10) (10)	(1) (1) (1) (1) (1) (1)

156 + 1 = _____ 156 + 2 = _____

156 + 10 = _____ 156 + 20 = _____

156 + 100 = _____ 156 + 200 = _____

370 + 1 = _____ 370 + 2 = _____

370 + 10 = _____ 370 + 20 = _____

370 + 100 = _____ 370 + 200 = _____

748 + 1 = _____ 748 + 2 = _____

748 + 10 = _____ 748 + 20 = _____

748 + 100 = _____ 748 + 200 = _____

499 + 1 = _____ 499 + 2 = _____

499 + 10 = _____ 499 + 20 = _____

499 + 100 = _____ 499 + 200 = _____

610 + 1 = _____ 610 + 2 = _____

610 + 10 = _____ 610 + 20 = _____

610 + 100 = _____ 610 + 200 = _____

This is Buster. He is a very busy kid!
Read the clues and write what he does each day.



Monday	_____
Tuesday	_____
Wednesday	_____
Thursday	_____
Friday	_____
Saturday	_____

1. He has a soccer game on Thursday.
2. He has swim lessons 3 days before soccer.
3. He has music lessons 2 days after soccer.
4. He has cub scouts the day before music lessons.
5. He goes to the library the day after swim lessons.
6. What day does he get to stay home? _____

Name _____

{ Comprehension }

72

Use the glossary to answer the questions.

text features RI.2.5



Glossary

arboreal (ahr • bawr • ee • uhl)-
an animal that lives mostly in trees

canopy (kan • uh • pea)- the high
treetops in a rainforest

diurnal (di • ur • nl) – an animal
that is awake during the day

feral (fer • uhl)- wild animals

plastron (plas • tren) – the flat
underneath side of a turtle shell

- Which word in the glossary tells you where in the rainforest monkeys and birds live?
 diurnal plastron canopy
- Which is an example of a *diurnal* animal?
 owl horse bat
- An *arboreal* animal might live in a:
 kapok tree waterfall burrow
- Which word in the glossary tells you what kind of animals live in the rainforest?
 canopy plastron feral

Name _____

{ Fast Facts }

72

Answer each problem as quickly as you can without using your fingers. If you don't know the answer right away, put a circle around the problem and go to the next one. After you've finished all the problems you know, go back and work out the problems you circled. Can you think of a way to remember these problems so you will know them next time?

19	15	12	14	15	11	14	14
<u>-19</u>	<u>-10</u>	<u>-2</u>	<u>-4</u>	<u>-14</u>	<u>-9</u>	<u>-13</u>	<u>-7</u>

18	11	10	13	13	15	18	18
<u>-11</u>	<u>-11</u>	<u>-2</u>	<u>-4</u>	<u>-11</u>	<u>-3</u>	<u>-6</u>	<u>-12</u>

8	18	2	14	16	16	14	10
<u>-1</u>	<u>-16</u>	<u>-2</u>	<u>-3</u>	<u>-13</u>	<u>-10</u>	<u>-9</u>	<u>-9</u>

Name: _____


Date: _____

Riddle 29

What's the difference
between a bat and a fly?

Add or subtract.

Solve the riddle using your answers.



$$4 + 5 = \underline{\quad} \\ \text{B}$$

$$50 + 10 = \underline{\quad} \\ \text{Y}$$

$$8 - 3 = \underline{\quad} \\ \text{F}$$

$$80 - 30 = \underline{\quad} \\ \text{N}$$

$$\underline{\quad} + 4 = 10 \\ \text{T}$$

$$95 - 5 = \underline{\quad} \\ \text{R}$$

$$\underline{\quad} - 2 = 10 \\ \text{C}$$

$$50 - 2 = \underline{\quad} \\ \text{U}$$

$$17 - 3 = \underline{\quad} \\ \text{L}$$

$$3 + 7 + 7 = \underline{\quad} \\ \text{E}$$

$$14 + 6 = \underline{\quad} \\ \text{A}$$

$$4 + 5 + 6 = \underline{\quad} \\ \text{O}$$

Solve the Riddle!

Write the letter that goes with each number.

209206122050514609486205146012205069206

Name _____

{ Grammar }

73

Adverbs can tell HOW it happens

Read the sentence. Write the adverb.

parts of speech L.2.1

1. The boys ran quickly. How did the boys run?

2. The baby cried loudly. How did the baby cry?

3. The wind blew softly. How did the wind blow?

4. The fire burned high. How did the fire burn?

5. He easily lifted her. How did he lift her?

6. They cheerfully sang. How did they sing?

Name _____

{ Problem Solving }

73

Solve the problems. Then **explain your thinking** using words, numbers, or pictures.


2.OA.1

True or False

4 dimes and 5 pennies is the same amount as 1 quarter, 2 nickels, and 5 pennies.

Prove it.

Each circle is worth 2 points.
How many points for the pictures below?



The temperature this morning was 38 degrees. At noon, it was 67 degrees. How much warmer did it get from morning to noon?

Birthday Bashes

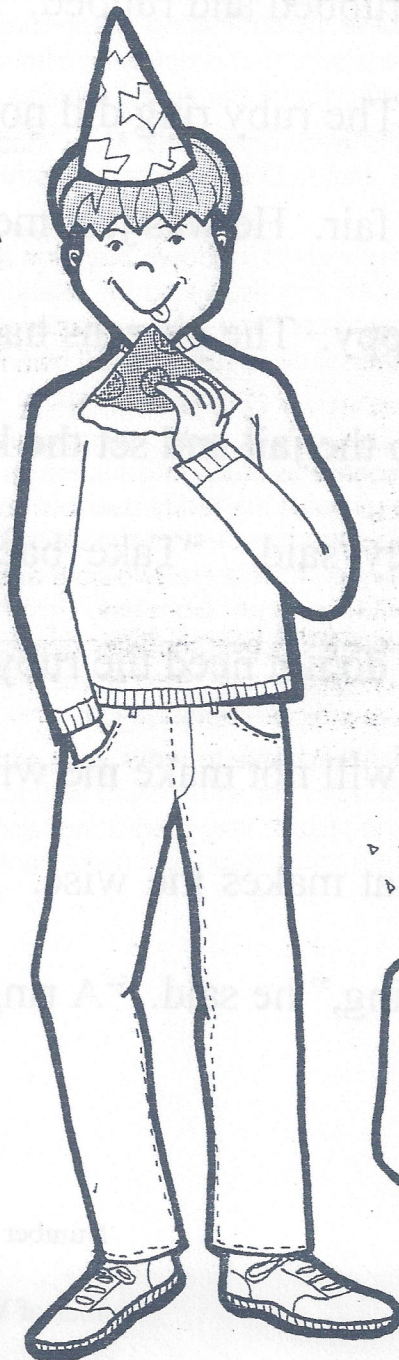

Lyle, Ryan, and Troy have their birthdays in the same month. They have chosen to have their parties at the roller rink, the miniature golf course, and the pizza parlor. Tear open these clues to find out how each person will be celebrating his special day.

Clues

1. Lyle, and the boy who has chosen the roller rink, and the boy whose party will be at the pizza parlor are all very excited.
2. Troy's party will not be at the pizza parlor.

roller rink miniature golf pizza parlor

	roller rink	miniature golf	pizza parlor
Lyle			
Ryan			
Troy			



Name _____

{ Writing }

L.2.1

Use words from the box to fill in the chart to make a SUPER SENTENCE!

expanding sentences

When (adverb)	Describe It (adjective)	Who or What (noun)	Did What (verb)	Where (adverb)
		ants		

Adverbs (time)
 yesterday then
 this morning first
 last summer today

Adjectives
 tiny busy black
 red smooth quick
 many annoying



Verbs
 danced dug built
 ate swam laughed
 climbed chewed

Adverbs (place)
 underground outside
 inside upstairs
 nearby somewhere

Now write your super sentence about ants.

I used correct capitals. I used correct punctuation. I used my best spelling. My sentence makes sense.

Name _____

{ Graphing }

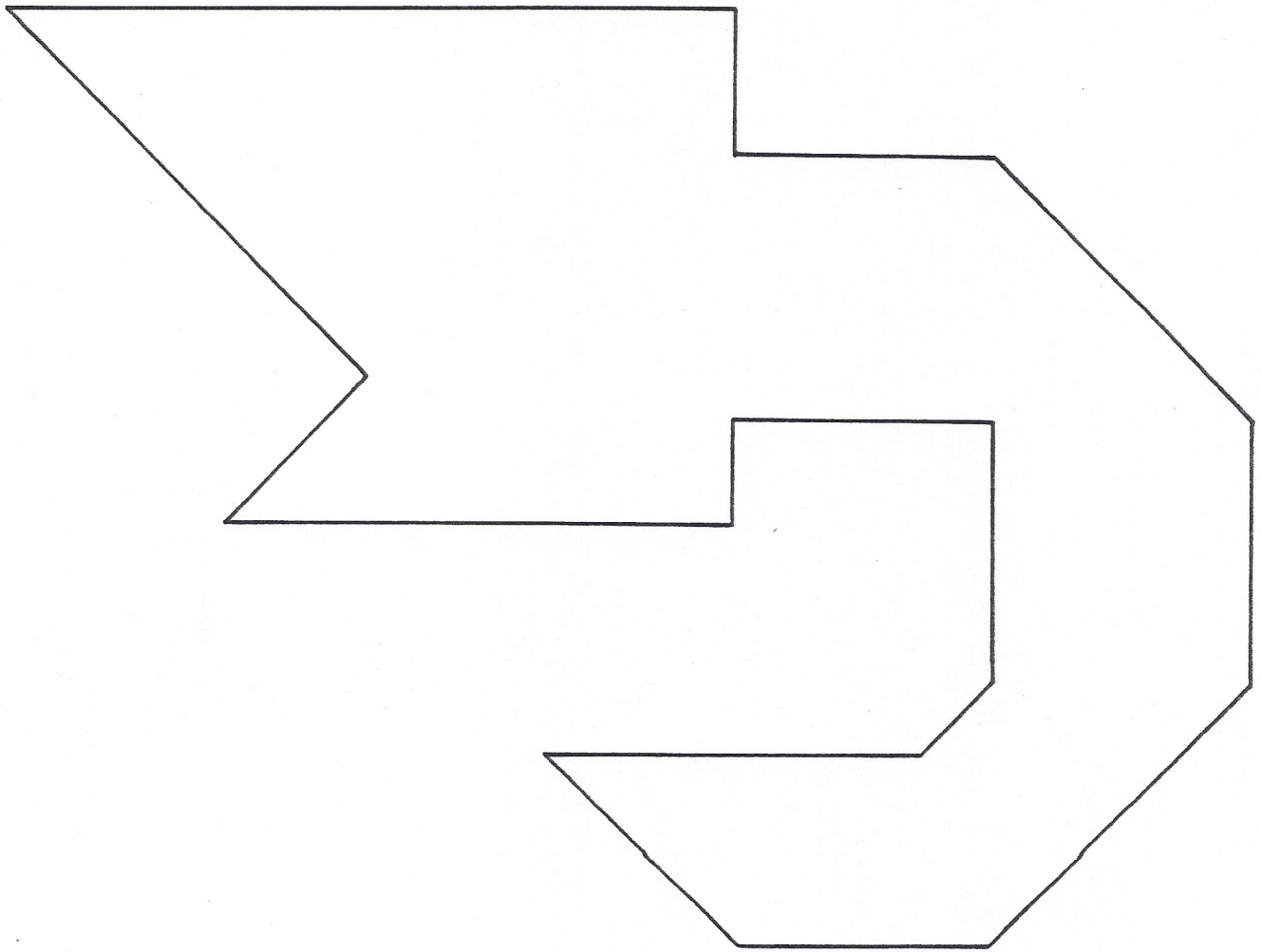
Over 30 years, the price of a first-class stamp more than doubled. Use the table to answer the questions.

data table 2.MD.10

- How much did a stamp cost in 1988? _____
- In which year did a stamp cost 32¢? _____
- In which year did a stamp cost 41¢? _____
- Which year was cheaper: 1988 or 2006? _____
- How much would it have cost to buy 2 stamps in 1991? _____
- How much more does a stamp cost in 2009 than a stamp in 1979? _____
- How much cheaper was a stamp in 1997 than in 2007? _____

1979	15¢
1988	25¢
1991	29¢
1997	32¢
2006	39¢
2007	41¢
2009	44¢





shrimp

Task: Cut out the shapes below. Use the seven Tangram pieces to solve the puzzle on the next page.

