


Name: \_\_\_\_\_

# Valuable Words: ee/ea



Find out how much each word is worth by adding up the value of each letter!

A:	B:	C:	D:	E:	F:	G:	H:	I:	J:	K:	L:	M:
4	1	1	2	5	1	2	3	6	1	2	5	4
N:	O:	P:	Q:	R:	S:	T:	U:	V:	W:	X:	Y:	Z:
4	7	2	1	3	5	5	3	1	2	10	8	9



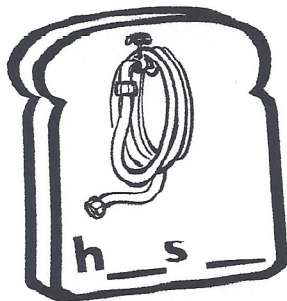



WORD:	WRITE IT:	VALUE:
jeep		
beep		
knee		
weep		
freeze		
queen		
sweet		

each		
leak		
meat		
seal		
teach		
beast		
clean		
speak		






Name \_\_\_\_\_

Write o\_e, oa, or ow to complete each word.



Name \_\_\_\_\_

<p>How many numbers can you think of that have 3 tens?</p>	<p>What is a number that has 2 more tens than 50?</p>	<p>What number has 2 more tens than 40 and the same number of ones as 18?</p>
<p>There are 4 tens and 6 ones. What is 20 more? _____</p> 	<p>There are 7 tens and 4 ones. What is 30 less? _____</p> 	<p>There are 59 beads in the bag. How many beads are there in all? _____</p> 
<p>forty + thirty = _____</p>	<p>70 + 20 + 4 = _____</p>	<p>10 + 3 + 60 + 2 = _____</p>



Name \_\_\_\_\_

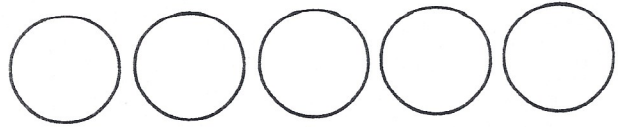
When Marvin Monkey dances, people put money in his cup?  
Every hour Marvin counts his money. Marvin is a very smart monkey.



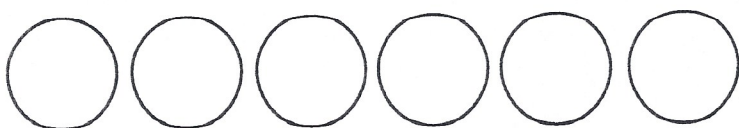
1. Monday he had 16 cents.  
He had 3 coins.  
What were they?



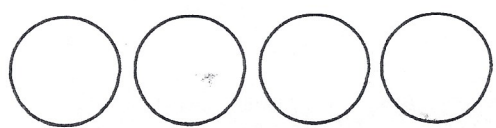
2. Tuesday he had 5 cents.  
He had 21 cents.  
What were the coins?



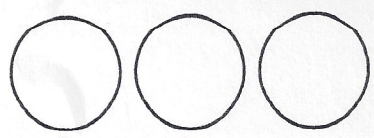
3. Wednesday he had 19 cents.  
He had 6 coins.  
What were they?



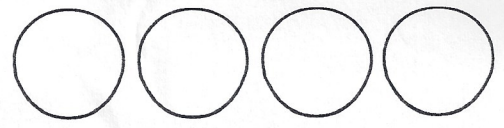
4. Thursday he had 4 coins.  
He had 40 cents.  
What were the coins?



5. Friday he had 3 coins.  
He had 7 cents.  
What were the coins?



6. Saturday he had 26 cents.  
He had 4 coins.  
What were they?





Name \_\_\_\_\_

Decide how the stories are alike and how they are different.

Squirrel was looking for lunch when he saw it: a red, shiny apple. It looked so juicy! He couldn't wait to taste it. He decided to take it home, but it was too big to lift. He pushed. He pulled. But no matter what, it didn't move. Chipmunk came by. He saw Squirrel's problem and offered to help. Squirrel said no because he didn't want to share his apple. Chipmunk left and Squirrel kept trying to push the apple. Soon Rabbit came by. She took the apple from Squirrel and had a yummy snack. And Squirrel didn't have anything to eat.

How are these two stories the same?

How are these two stories different?

My sister got some new shoes. They are purple with sparkly, silvery shoelaces. But she doesn't know how to tie shoes yet. I said I would teach her. I showed her. Then she wanted to try. She wrapped the shoelaces together. She pulled. She tugged. But it wasn't working. I asked if she wanted help, but she said no. Pretty soon she had knotted her shoelaces so tight that I couldn't get them undone. I had to cut them apart. Now her sparkly shoelaces are ruined and she has to use plain white ones in her new shoes.

Name \_\_\_\_\_

Answer each problem as quickly as you can without using your fingers. If you don't know the answer right away, put a circle around the problem and go to the next one. After you've finished all the problems you know, go back and work out the problems you circled. Can you think of a way to remember these problems so you will know them next time?

2	9	7	5	6	3	4	13
<u>+2</u>	<u>+7</u>	<u>+6</u>	<u>+6</u>	<u>+4</u>	<u>+10</u>	<u>+0</u>	<u>+2</u>

3	9	13	11	3	10	18	14
<u>+1</u>	<u>+4</u>	<u>+3</u>	<u>+8</u>	<u>+4</u>	<u>+5</u>	<u>+2</u>	<u>+6</u>

5	15	12	16	14	2	1	11
<u>+2</u>	<u>+5</u>	<u>+0</u>	<u>+4</u>	<u>+3</u>	<u>+5</u>	<u>+8</u>	<u>+2</u>



Skip-Counting  
to 100 by 5's

Name: \_\_\_\_\_

Riddle **23**

Which side of a house gets the most rain?

Count by 5's. Write the missing numbers.  
Solve the riddle using your answers.



10, 15, 20, _____ E	45, 50, 60, _____ I
30, 35, 40, _____ N	15, 20, 25, _____ S
40, 45, 50, _____ T	25, 30, 35, _____ F
60, 65, 70, _____ R	35, 40, 45, _____ U
80, 85, 90, _____ O	85, 90, 95, _____ D
55, 60, 65, _____ H	75, 80, 85, _____ B

**Solve the Riddle!**

Write the letter that goes with each number.

- |       |       |       |       |       |       |       |       |
|-------|-------|-------|-------|-------|-------|-------|-------|
| _____ | _____ | _____ | _____ | _____ | _____ | _____ | _____ |
| 95    | 50    | 55    | 30    | 65    | 100   | 25    |       |



Jame \_\_\_\_\_

{ Grammar }

48  
parts of speech L.2.1

Find all the verbs and write them on the signs.

dances

cut

road

girl

chew

nice

wrote

carry

green

sleep

wait

sing

Name \_\_\_\_\_

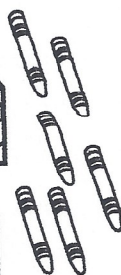

{ Problem Solving }

48

Solve the problems. Then **explain your thinking** using words, numbers, or pictures. 2.OA.1

There are 32 crayons in the big box. Some crayons are out of the box. How many crayons are there in all?

Show your thinking.



Linda has 11 red marbles, 24 blue marbles, and 4 clear marbles. How many does she have in all?

Show your thinking.





One shelf has 19 books and 11 magazines. Another shelf has 13 books. How many magazines does it need to be equal to the first shelf?



# ACTIVITY 10

DIRECTIONS: Fill in the chart using Y for yes or N for no as you solve the puzzle.

**A      B      C      D**

Two girls and their parents make up the Sanchez family. Find the first letter of each person's name.

1. People say Dona gets her curly hair from her father, Carlos.
2. Anita is younger than Bonita but older than Dona.



Name \_\_\_\_\_

This is a boring sentence: **A bird sat.**

Use words from the box to fill in the chart to make a SUPER SENTENCE!

	Describe It (adjective)	Who or What (noun)	Did What (verb)	Where (adverb)
A		bird		

**Adjectives**  
noisy little funny  
red old hungry



**Verbs**  
sang flew slept  
chirped hopped

**Adverbs**  
here outside nearby  
there somewhere

Now write your super sentence about the bird.

\_\_\_\_\_

-----

\_\_\_\_\_

-----

- I used correct capitals.     I used correct punctuation.     I used my best spelling.     My sentence makes sense.

Name \_\_\_\_\_

Noah kept track of how many birds came to his birdfeeder for five days.  
Use the table to answer the questions.

**Birds at Noah's Birdfeeder**



Monday	6
Tuesday	9
Wednesday	6
Thursday	11
Friday	3

- How many birds came on Tuesday? \_\_\_\_\_
- How many MORE birds came on Thursday than Monday? \_\_\_\_\_
- How many birds came in all? \_\_\_\_\_
- Which day had the fewest birds? \_\_\_\_\_
- Which days had the same number of birds?  
\_\_\_\_\_

6. If 2 more birds had come on Wed., how many would it have? \_\_\_\_\_



# SQUARE PUZZLE

~~Have a copy of this page made.~~ Cut out each of the five shapes below and place the pieces together in the shape of a square.

